



The National  
Orthodox School  
Shmaisani

Name: \_\_\_\_\_

Subject: Science  
Worksheet (1): The Digestive system

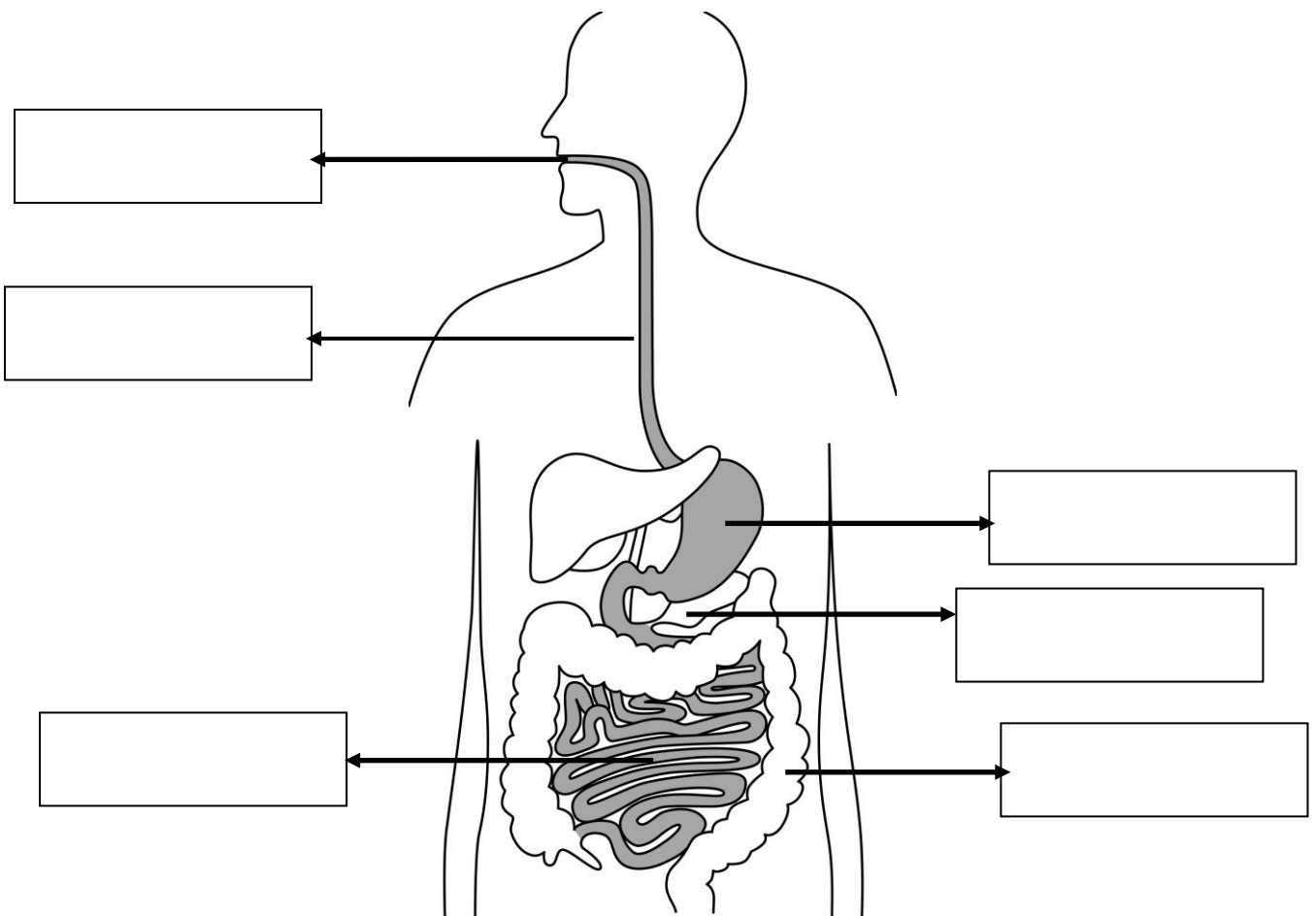
Date: / /

Class: Grade 6 (A)

**-Objective/s:**

- Understand the function of each organ in the digestive system.
- label the main organs of human digestive system.

- Write the names of the organs in the digestive system.



Accredited by



Cambridge Assessment  
International Education  
Cambridge International School

edexcel

CIS  
COUNCIL OF  
INTERNATIONAL  
SCHOOLS



- Explain the difference between Physical (mechanical) digestion and chemical digestion:


**Physical (mechanical) digestion:**

.....  
 .....

**Chemical digestion:**

.....  
 .....

- State the function of each part of your digestive system below:



**Part:** .....

**Function:** .....

.....

**Type of digestion:** .....



**Part:** .....

**Function:** .....



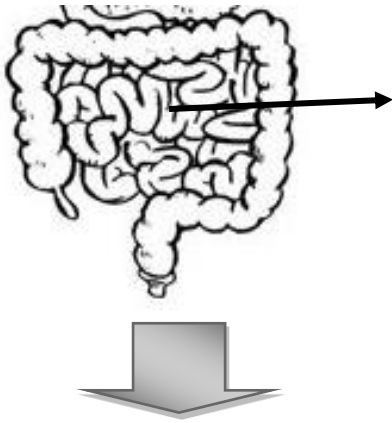
**Part:** .....

**Function:** .....

.....

.....

**Type of digestion:** .....

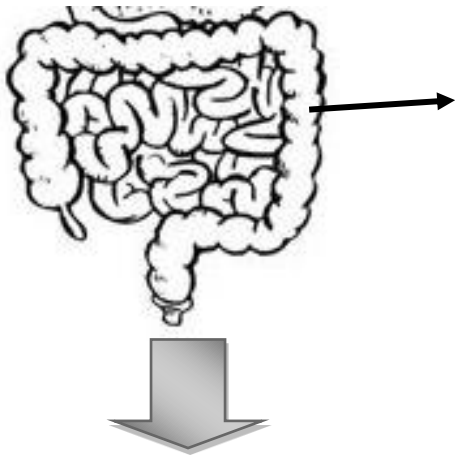


Part: .....

Function: .....

.....  
 .....  
 .....

Type of digestion: .....



Part: .....

Function: .....

.....  
 .....  
 .....



The remaining **waste (Faeces)** is held in the **rectum** by a muscle, before we release it **through the anus**.

Accredited by

